

# Spring Maths Revision

## Activity Booklet **Answers**

### Collect the Daffodils

---

12   32   40   54   67   99

50   51   52   53   55   59

4   14   34   64   84   94

81   76   67   63   36   21

98   88   78   38   28   18

20   19   17   14   11   10

### Match the Carrots to the Bunnies

---

43 – 3 ones

96 – 9 tens

78 – 8 ones

21 – 2 tens

30 – no ones

44 – same number of tens and ones

57 – 5 tens

75 – 5 ones

32 – 2 ones

2 – no tens

## Easter Addition and Subtraction

---

$$4 + 5 + 6 = 15$$

$$8 + 7 = 15$$

$$34 + 42 = 76$$

$$51 + 23 = 74$$

$$45 + 10 = 55$$

$$67 + 9 = 76$$


$$82 - 10 = 72$$

$$93 - 22 = 71$$

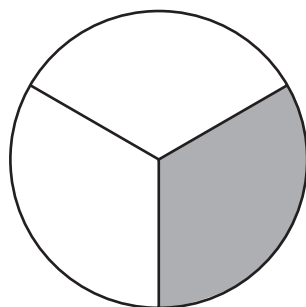
$$92 - 18 = 74$$

## Fractions

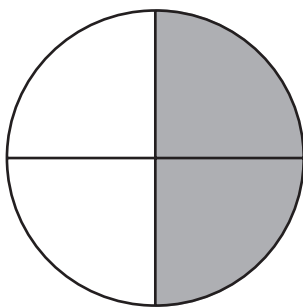
---



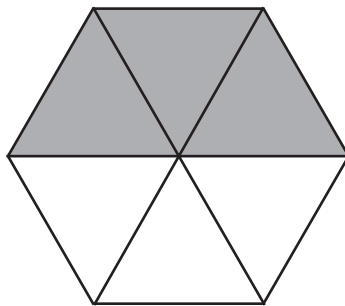
Shade  $\frac{1}{4}$



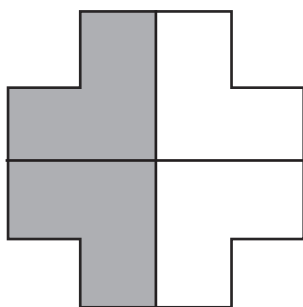
Shade  $\frac{1}{3}$



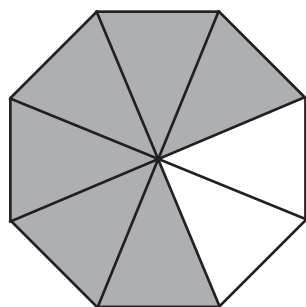
Shade  $\frac{1}{2}$



Shade  $\frac{1}{2}$



Shade  $\frac{2}{4}$



Shade  $\frac{3}{4}$

## Flower Fractions

---

$\frac{1}{2}$  of 10 is 5

$\frac{1}{4}$  of 8 is 2

$\frac{1}{3}$  of 9 is 3

$\frac{3}{4}$  of 12 is 9 ( $12 \div 4 = 3$ ,  $3 \times 3 = 9$ )

## How Big Is the Chick?

---

chick A = 6cm

chick B = 3cm

chick C = 5cm

chick D = 9cm

chick A  chick B

chick B  chick C

chick A + chick B  chick D

## Marvellous Milkshakes

---

### Toffee Surprise

Example answer:  $20p + 5p + 2p + 1p$

### Marvellous Marshmallow

Example answer:  $10p + 10p + 10p + 5p$

### Choco Chip

Example answer:  $20p + 20p + 1p$

### Nutty Delight

Example answer:  $50p + 10p + 5p + 1p$

## How Many Jelly Beans?

Colours	Tally	Number
Yellow	III	3
Pink	HHH	5
Purple	III	3
Orange	II	2
Brown	HHH I	6
Green	I	1


How many pink jelly beans were there? **5**

How many more purple jelly beans than green jelly beans were there? **2**


Which colour had the jelly beans? **brown**

How many jelly beans were in the packet altogether? **20**


## Spring Time




6 o'clock




quarter past 8




twenty past 7



5 to 3




half past 1




quarter to 9



10 past 10



25 to 5



12 o'clock

## Spring Shapes

---

This shape has 3 sides and 3 corners. **triangle**

This shape has five sides and five corners. **pentagon**

This shape has two long sides and two short sides. **rectangle**

This shape has one curved side and no corners. **circle**

## Flower Boxes

---

<b>Mum</b>	"Mum's box will have two faces and one point. One of the faces is a circle."	<b>cone</b>
<b>Dad</b>	"Dad's box will have six square faces and 8 vertices."	<b>cube</b>
<b>Grandad</b>	"Grandad's box will have no edges and no vertices."	<b>sphere</b>
<b>Little brother</b>	"My little brother's box will have 5 faces. 3 of the faces are rectangles and two are triangles."	<b>triangular prism</b>
<b>Best friend</b>	"My best friend's box will have three faces and no vertices."	<b>cylinder</b>

## Spring Puzzles

---

1. James has 20 daffodils. He gives 11 of them away. How many does he have left?  
 **$20 - 11 = 9$**   
**He has 9 daffodils left.**
2. Sam picks some flowers. He gives half of them to his mum. He has 8 flowers left. How many flowers did he pick? **8 is half of 16, so he picked 16 flowers.**
3. Maisie spends exactly 20p on treats. Tick the selection of treats that she buys.



## Spring Puzzles

---

1. Max is packing up cakes for the Spring fair. He puts two cakes in each bag. How many cakes are there altogether?

$$6 \times 2 = 12$$

**There are 12 cakes altogether.**

2. Mo is decorating cakes for the fair. He wants to put 3 chocolate buttons on each cake. How many buttons will he need?

$$10 \times 3 = 30$$

**He needs 30 buttons.**

3. Mina plants some carrots for her rabbit. She plants 5 rows with 4 carrots in each. When the carrots have grown, she pulls up 3 to give to her rabbit. How many carrots are left?

$$5 \times 4 = 20 \quad 20 - 3 = 17$$

**17 carrots are left.**

4. Joe wants to give some flowers to his mum, his gran and his aunt. He wants to give them 5 flowers each. Tick two number sentences he could use to work out how many flowers he needs altogether.

$$3 \times 5 \checkmark$$

$$3 + 3 + 3$$

$$5 + 5 + 5 \checkmark$$

$$5 \times 5$$